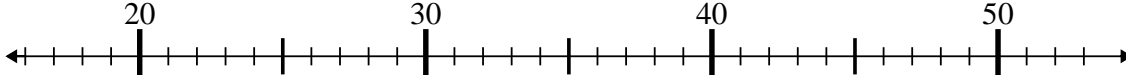




Use the numberlines to solve each problem.

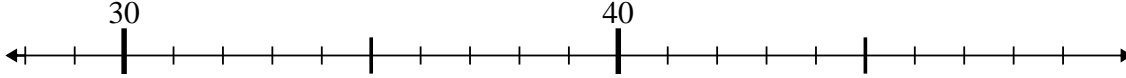
**Answers**

1)  $24 - 0 = ?$



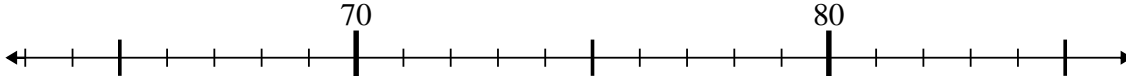
1. \_\_\_\_\_

2)  $38 - 10 = ?$



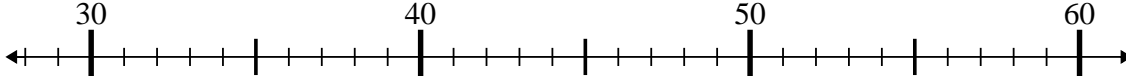
2. \_\_\_\_\_

3)  $74 + 11 = ?$



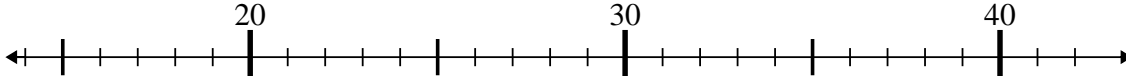
3. \_\_\_\_\_

4)  $29 + 6 = ?$



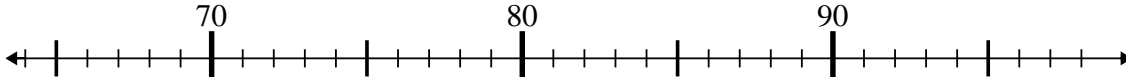
4. \_\_\_\_\_

5)  $21 + 13 = ?$



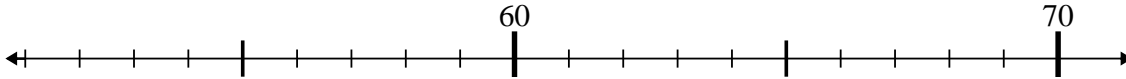
5. \_\_\_\_\_

6)  $76 + 3 = ?$



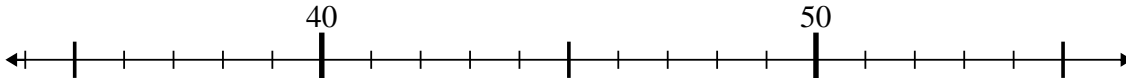
6. \_\_\_\_\_

7)  $70 - 0 = ?$



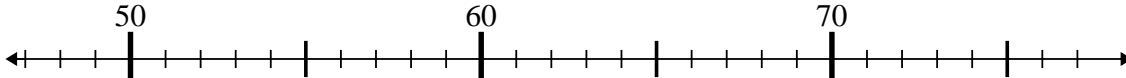
7. \_\_\_\_\_

8)  $41 - 3 = ?$



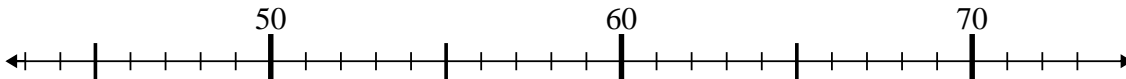
8. \_\_\_\_\_

9)  $69 - 16 = ?$



9. \_\_\_\_\_

10)  $66 + 1 = ?$

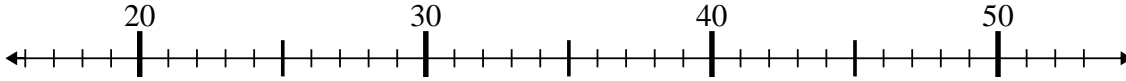


10. \_\_\_\_\_

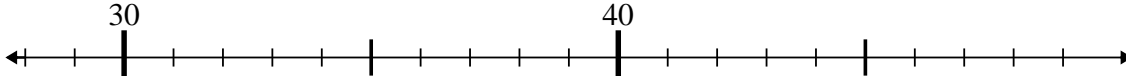


Use the numberlines to solve each problem.

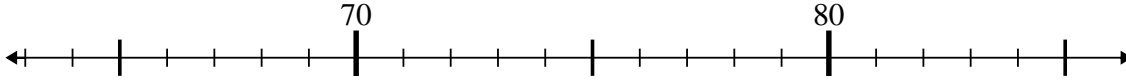
1)  $24 - 0 = ?$



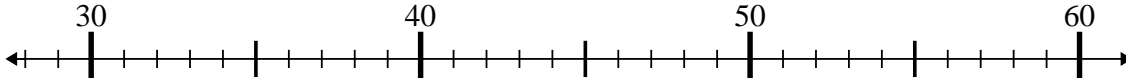
2)  $38 - 10 = ?$



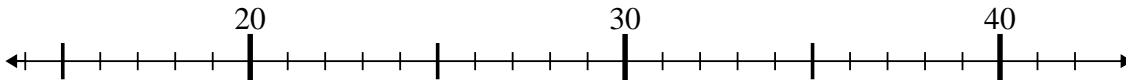
3)  $74 + 11 = ?$



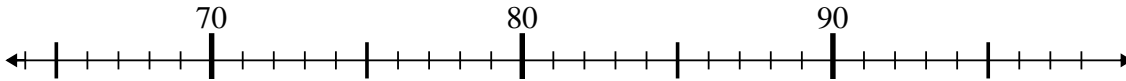
4)  $29 + 6 = ?$



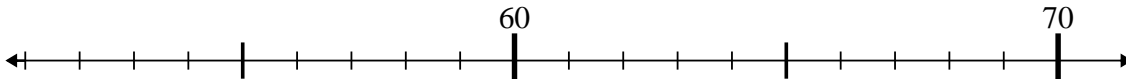
5)  $21 + 13 = ?$



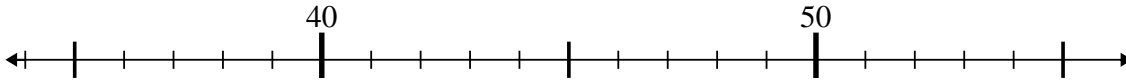
6)  $76 + 3 = ?$



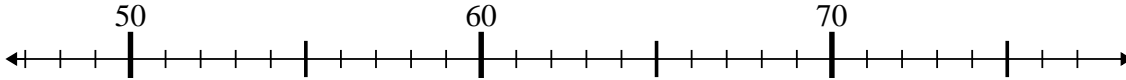
7)  $70 - 0 = ?$



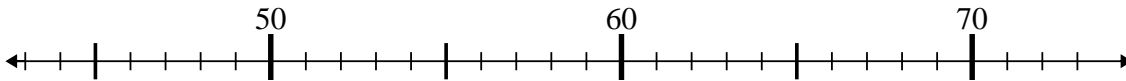
8)  $41 - 3 = ?$



9)  $69 - 16 = ?$



10)  $66 + 1 = ?$



**Answers**

1. 24
2. 28
3. 85
4. 35
5. 34
6. 79
7. 70
8. 38
9. 53
10. 67